

සියලු ම නිමිකම් ඇවිරිණි]

முழுப் பதிப்புரிமையுடையது]

All Rights Reserved]

බස්නාහිර පළාත් අධ්‍යාපන දෙපාර්තමේන්තුව - කොළඹ අධ්‍යාපන කලාපය බස්නාහිර පළාත් අධ්‍යාපන දෙපාර්තමේන්තුව - කොළඹ අධ්‍යාපන කලාපය බස්නාහිර පළාත් අධ්‍යාපන දෙපාර්තමේන්තුව - කොළඹ අධ්‍යාපන කලාපය		
බෝලා මාර්ගගත කல்විත් තිணைக்கොටු	බස්නාහිර පළාත් අධ්‍යාපන දෙපාර්තමේන්තුව - කොළඹ අධ්‍යාපන කලාපය	කොළඹ - කොළඹ
Western Provincial Education Department	බෝලා මාර්ගගත කல்විත් තිணைக்கොටු - කොළඹ අධ්‍යාපන කලාපය	Department - Colombo Ed
බස්නාහිර පළාත් අධ්‍යාපන දෙපාර්තමේන්තුව - කොළඹ අධ්‍යාපන කලාපය බස්නාහිර පළාත් අධ්‍යාපන දෙපාර්තමේන්තුව - කොළඹ අධ්‍යාපන කලාපය බස්නාහිර පළාත් අධ්‍යාපන දෙපාර්තමේන්තුව - කොළඹ අධ්‍යාපන කලාපය		
දෙවන වර ඇසීම - 2017		
இரண்டாம் தவணை மதிப்பீடு - 2017		
6 ශ්‍රේණිය	භූගෝල විද්‍යාව I හා II පොත	පැය දෙකයි
தரம் 6	புவியியல் வினாத்தாள்-1-11	இரண்டு மணித்தியாலங்கள்

NAME /INDEX NUMBER :

CLASS :

• **Questions 01-05, select the correct answer and underline.**

(01) The smallest administrative division

- | | |
|------------------------------------|-----------------------------|
| 1. District | 3. Grama Niladhari Division |
| 2. Divisional secretarial Division | 4. Province |

(02) The instrument that is used to find the correct direction

- | | |
|-----------------------------|---------------|
| 1. Wind direction indicator | 3. Anemometer |
| 2. Barometer | 4. Compass |

(03) The main element of weather is,

- | | |
|----------------|-----------------|
| 1. Temperature | 3. Wind |
| 2. Rainfall | 4. Air pressure |

(04) The instrument used for measuring the speed of the wind

- | | |
|-----------------------------|----------------|
| 1. Wind direction indicator | 3. Rain gauge |
| 2. Anemometer | 4. Thermometer |

(05) The total number of provinces in Sri Lanka,

- | | |
|-------|----------|
| 1. 24 | 3. 25 |
| 2. 9 | 4. 14000 |

• **Questions 06-10, read the statements given and write '✓' if it is correct and write '×' if it is incorrect within the given brackets.**

(06) Western Province consists of three districts. ()

(07) Water in oceans, on land and in plants turn into vapour due to the heat

- of the Sun. ()
- (08) Earth worms and termites are harmful to the environment. ()
- (09) Water vapour that rises up in the atmosphere cools and condenses. ()
- (10) The Department of Meteorology is located in the Gampaha District. ()

• **Questions 11-15, select the appropriate answer from box given below.**

storm, breeze, Ambalangoda, Moratuwa, earthslips, millimetres,
centimetres, temperature, rainfall

- (11) is famous for the traditional mask making industry.
- (12) The sun provides and temperature to the Earth.
- (13) The wind that blows at a higher speed is called a
- (14) Cultivation on mountain slopes causes
- (15) The rainfall is measured with the unit,


• **Questions 16-20, provide short answers.**

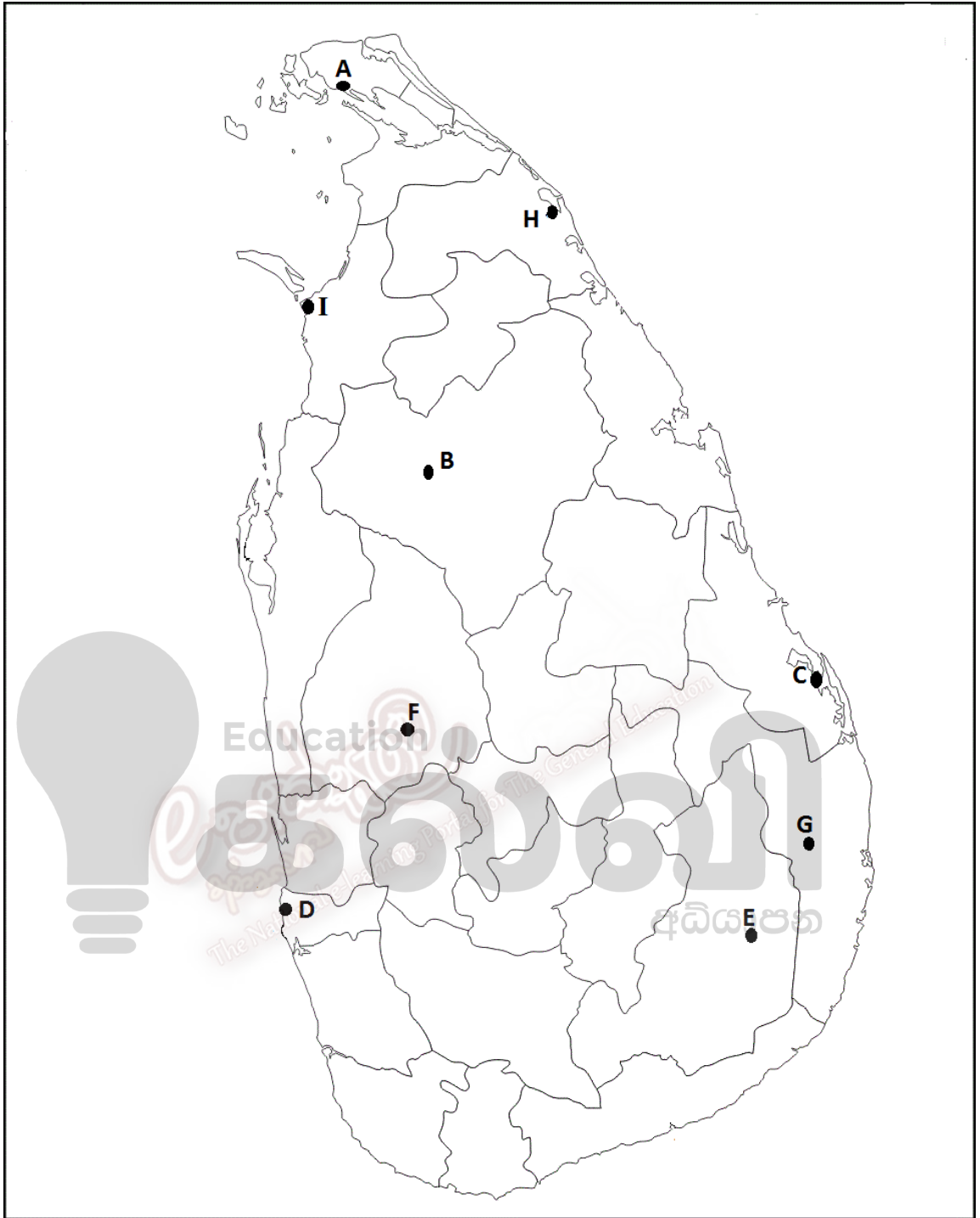
- (16) Water is a resource which is essential for the existence of living being that helps in various purposes.
- (17) causes diseases related to the respiratory system.
- (18) Land, water and are considered as basic components of the immediate natural surroundings.
- (19) Physical and condition of people contribute towards the agricultural and industrial activities.
- (20) The kitchen waste, plants and small pieces of hay, liquid cow dung can be used to prepare a unit to fulfil the energy needs of your house.

Part II

- Question **number 1** is compulsory.
- Answer other **four** questions.
- Total number of questions to be answered is **five**.

(01) (i) Study the map given below and write the correct letter for each place.





- | | |
|-----------------|---------------|
| 1. Mullativu | 6. Moneragala |
| 2. Kurunegala | 7. Ampara |
| 3. Colombo | 8. Batticaloa |
| 4. Anuradhapura | 9. Mannar |
| 5. Jaffna | 10. Matara |

(ii) Write the largest province and the smallest province of Sri Lanka

(12 marks)



- (iii) Write two crops that are cultivated in the dry zone and three crops in the wet zone. (5 marks)

- (05) (i) Given below are the traditional industries of Sri Lanka. Name the places famous for each place.

(a) Brassware

(b) Mats

(c) Furniture

(3 marks)

- (ii) Among the economic activities found in the immediate surroundings of your school and home, the service sector is very important. Mention four services that are available in any region. (4 marks)

- (iii) Write five various ways of utilizing the land which is a basic component of the environment. (5 marks)

- (06) (i) Write 3 ways in which water is polluted? (3 marks)

- (ii) Mention four types of energy sources. (4 marks)

- (iii) Name the following pictures A, B, C, D and E respectively. (5 marks)

A

B

C

D

E



(07) (i) Write three reasons for the increasing demand for energy. (3 marks)

(ii) Mention uses of the following animals to the environment or cultivation

A – Crow Pheasant

B – Termite

C – Earth worm

D – Bat

(4 marks)


(iii) (a) Name three materials that are used in bio-gas unit.

(b) State two proper ways of disposing waste material.

(5 marks)

Only for the Muslim schools

- (08) (i) Write three basic components/ features of a map. (3 marks)
- (ii) Name four main cardinal directions. (4 marks)
- (iii) (a) Name two other districts bordering the district in which your school is located.
- (b) Write three uses of the plants to us. (5 marks)
- (09) (i) Southern province constitutes with three districts. Name them. (3 marks)
- (ii) (a) Write two uses of the wind.
- (b) Write two uses of rainfall. (4 marks)
- (iii) (a) Some birds migrating to our country during the winter season as they are unable to bear the coldness there Write three such birds.
- (b) State two industries which are based on the traditional knowledge? (5 marks)



May

ONLINE CLASSES - 2025

NEW ADMISSIONS

2ம் தவணை வகுப்புகள்

தரம் 6 முதல் O/L வரை

அனைத்து பாடங்களும் ஒரே
கல்வி நிறுவனத்தின் கீழ் ...



இலங்கையின் எப்பாகத்திலிருந்தும்
ZOOM APP மூலம் எமது வகுப்புகளில்
இணைந்து கொள்ள முடியும்.



JOIN NOW

WWW.KALVI.LK

075 287 1457