

Divisional Education Office - Nallur, Jaffna

Second Term Examination - 2015

Grade: 11	Geography	Time: 3 Hours
	Name / Index No. :	

- * This question paper comprises 40 questions.
- * Answer all questions on this paper itself in accordance, with the instruction given for each questions.
- * Select from the answers given within brackets, the answer that suits the blank in each question from No 1 to 10 and write it on the dotted line.

01. is the largest island in the world. (Greenland, Island, Madagascar)
02. is connected with ocean. (Meditarion sea, Caspian sea, Aeral sea)
03. is a metamorphic rock. (Coal, Granite, Diamonds)
04. of the population lives in Nothern hemisphere. (90%, 64%, 60%)
05. The rocks belongs to are found widely distributed in Sri Lanka. (Pre - Cambrian, Pleistocene Era, Mesosoic)
06. Peta coal found in (Eppawala, Muthurajawela, Pulmota)
07. Sri Lanka is belongs to plate. (Indo Australian, Eurasia, Antartica)
08. Exclusive Economic zone of Sri Lanka extend up to from cost line (12, 24, 200)
09. mineral distributed in pulmodday of North east caast line of Sri Lanka. ((Slica sand, Ilemenite, Monazite)
10. The largest mountain range in South American is (Rocky, Appalachian, Andes)

Read each statement given under questions from No 11 to 20 and circle 'T' if it is correct and circle 'F' if it is wrong.

11. Nigeria consist the highes population growth rate. (T / F)
12. The demand for cotton cloth will be increase due to global worming. (T / F)
13. Antarctic is the home land for Eskimos. (T / F)
14. Coniferous forests are distributed in Amazon valley in South America and Congo valley in Africn. (T / F)
15. Time taken to double the population in developing countries is faster than developed countries. (T / F)
16. Biosphere forms with the combination of lithosphere and Hydrosphere. (T / F)

17. Thar is the largest Tropical desert located in North Africa. (T / F)
18. Settlements were originated since the human lived as hunters. (T / F)
19. Aged population may be increased in future based on the present age structure in Sri Lanka. (T / F)
20. Internal migration is influence the change of population for a country. (T / F)

Fill in the blanks in the questions from No 21 to 30, with suitable words.

21. Lithosphere consist of igneous rocks. sedimentary rocks and
22. is the deepest trench in the word discovered so far.
23. Minerals are formed from
24. According to the age structure , The people between 0 - 14 gradually.
25. is a layer of crust.
26. will be the highest populated country in the world in 2050.
27. Tobbowa and Andgama areas belongs to period.
28. Sial and are the layers of crust.
29. Pacific ocean is connect with channel to Atlantic ocean.
30. The larger plain in the world Nullabar is located in

For the questions from No 31 - 40, select the correct or the most appropriate answer out of the four answers given and write its number on the dotted line provided against it.

31. The two seas which are completely covered with land.
 1) Dead sea, Red sea
 2) Caspian sea, Dead sea
 3) Areal sea, Red sea
 4) Black sea, caspian sea
 [.....]
32. The mineral mainly used to produce glasses.
 1) Monazite
 2) Slica
 3) Mica
 4) Ilemenite
 [.....]
33. The continent where the cities consist more than million population.
 1) North America 2) Asia
 3) Europe 4) Africa
34. The correct statement about world population.
 1) Over 50% of world population live in Northern hemisphere.
 2) 64% of world population live in 20% of land area
 3) 3/4 of world population live in Asia
 4) 60% of the total lives in ten countries.
 [.....]
35. Who is considered as the father of topographies map and he draw the map according to scale
 1) Ptlomy
 2) Herotenis
 3) Anexymendes
 4) Strabo
 [.....]

36. The correct statement about global distribution of water.
 1) 79% of the earth covered by water
 2) Water in the hydrosphere found in solid, liquid and gaseous form
 3) The water in cannels, rivers and lakes are considered as under ground water.
 4) Atlantic ocean is the smallest ocean compared to others. [.....]
37. The important country that import goods from Sri Lanka.
 1) China
 2) Jappan
 3) Singapore
 4) India [.....]
38. The percentage of forests in total land area.
 1) 29% 2) 10% 3) 60% 4) 50% [.....]
39. The district which have the lowest population dinsity.
 1) Colombo
 2) Jaffna
 3) Mullaithivu
 4) Negambo [.....]
40. The strait which join Atlantic ocean and meditarian sea.
 1) Suez
 2) Gib ator
 3) Dardanal
 4) Mezina [.....]

Part I

1. Answer the following questions based on the given 1 : 50 000 topographic map
- A 1) The administrative unit showed in North west corner of this map [2marks]
 2) Vegetation type found in the area indicated by 'D'. [2marks]
 3) Mention 2 type of roads found in map [2marks]
 4) Name the drinage pattern found in the map [2marks]
 5) Give the degree of longitudes go through letter 'C' [1mark]
 6) Give 04 cultural features found in the area 'G' [1mark]

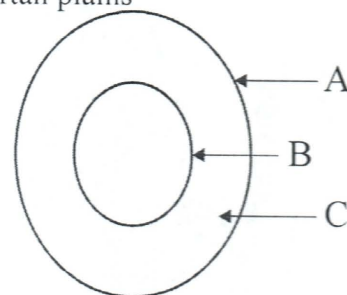
- B In the map of the world provided, mark and name the following items.

Missori Mississippi, Canbera city, Cuba islands
 Atlas mountain, Hutson bay.

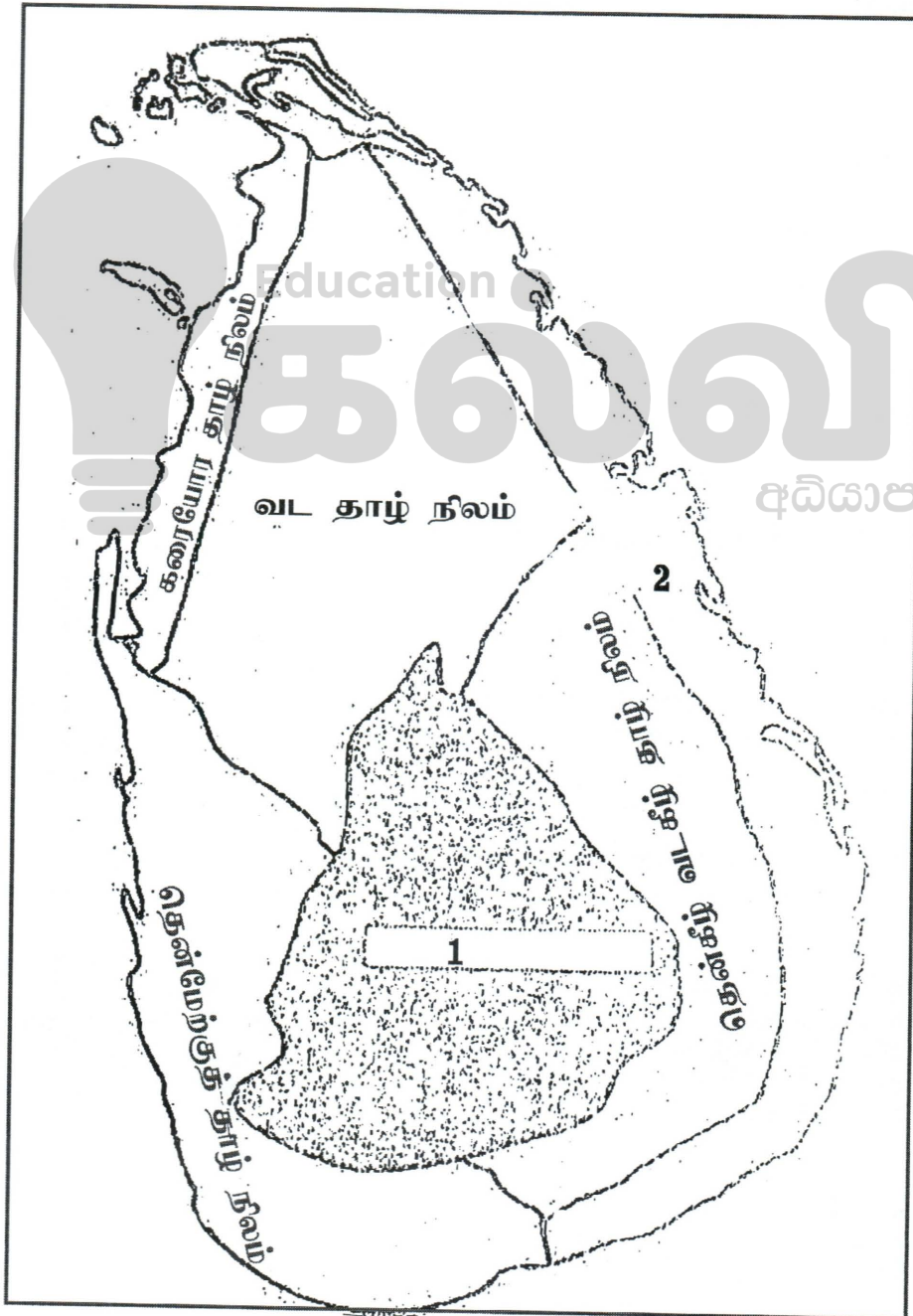
Mark and neme the outline map of Sri Lanka, the items given below.

Mannar island, Trincomalee harber, Hortan plains
 Adams peak, Elephant pass

2. 1) Name the letters ABC according to the structure of earth. [3marks]
 2) List 3 features of hydrosphere. [3marks]
 3) Mention 2 uses of biosphere for man and other living organism. [4marks]
3. 1) Give the method of formation of valuable resources. [3marks]
 2) Classfy the resources [3marks]
 3) Give 2 reasons for reducing natural resources. [4marks]

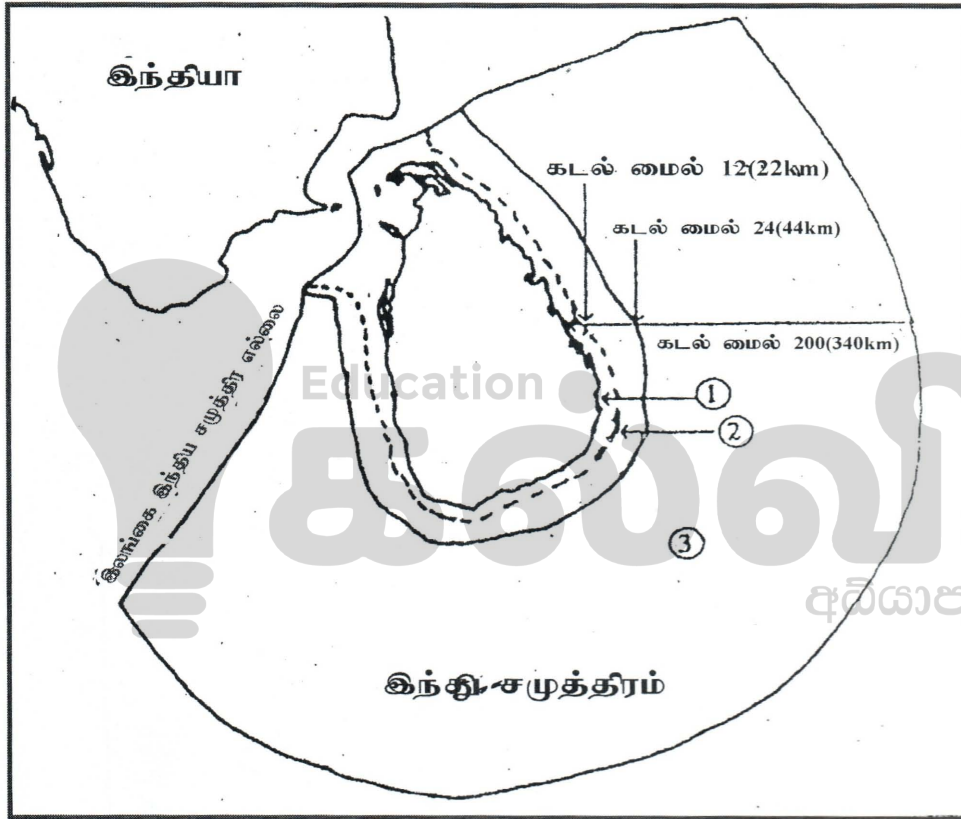


4. 1) What is population density? [3marks]
 2) Give the factors influence the change of population [3marks]
 3) Give 3 pushing factors of migration and explain two of them. [4marks]
5. 1) What is settlement.? [3marks]
 2) Give 3 features of cluster settlement [3marks]
 3) Give 2 physical factors influence on the development of settlement and explain them. [4marks]
6. Using the given Sri lankan map and answer the following questions.



- 1) Name the relief features marked as 1 and 2. [3marks]
 - 2) Give 3 economic activities carried out in intermediate zone. [3marks]
 - 3) Define the following coastal features with the help of the Sri lankan map. [4marks]
 1. Point
 2. Bay
 3. Lagoon.
7. 1) Mention 3 districts highly involved in paddy cultivation [3marks]
- 2) Give 3 current trends of paddy cultivation in Sri lanka. [3marks]
- 3) Give two reasons for that the shifting cultivation is unsuitable land used pattern and explain them. [4marks]

8.



The figure show the territorial limit and marine resources belongs to Sri Lanka.

- 1) Name the boundaries show in number 1 and 2 [3marks]
 - 2) Give 3 economic importance of zone 3 and explain 3 of them. [3marks]
 - 3) Give 2 reasons for the importance of the oceans for a country and explain them. [4marks]
9. 1) Mention two main sectors of fishing in Sri lanka. [3marks]
- 2) Mention 3 factors contribute to the development of fishing in Sri lanka. [3marks]
- 3) Fishing industry is very important for the strengthening of Sri lankan economy, Explain based on three factors. [4marks]



